

DOWNLOAD PDF DOCUMENT



ALGEBRA 1 GRADE 9 STAND...

DOWNLOAD DOCUMENT NOW

Updated: 11/05/2017

DISCLAIMER:

BE-FIRST.CO uses the following algebra 1 grade 9 standard test practice workbook holt algebra book available for free PDF download which is also related with

ALGEBRA 1 GRADE 9 STANDARD TEST PRACTICE WORKBOOK HOLT ALGEBRA

Our digital library offers you to download algebra 1 grade 9 standard test practice workbook holt algebra and other files in PDF format for free. There is no need to pay for registration, but you will have to pass it in order to get an unlimited access to the stock of eBooks. So, if you need algebra 1 grade 9 standard test practice workbook holt algebra, just follow the link below, pass the registration and enjoy reading algebra 1 grade 9 standard test practice workbook holt algebra or other books from almost any advice supporting PDF format. You may ask why we ask our users to pass registration. It is done to simplify the work of the library and prevent countless hackers' attacks that cause certain discomfort to the users of our digital library. You need to register only once in order to get an access to algebra 1 grade 9 standard test practice workbook holt algebra and other files. It will take you little time to register and then to download algebra 1 grade 9 standard test practice workbook holt algebra.

DOWNLOAD NOW

DOWNLOAD PDF DOCUMENT

DOWNLOAD PDF DOCUMENT

ALGEBRA 1 GRADE 9 STAND...

4TH GRADE SOCIAL STUDIES TEST

Test Administration Manuals Pre and Post assessments in social studies Assessment Use Series 6th grade social studies 7th grade social studies B wealthy landowners C farmers D skilled artisans Name Date Test Teacher 4th Grade Social Studies Test Practice Test Fourth Grade Social Studies using Scott Foresman Social Studies in meeting the Indiana Core Standards for Social Studies Kindergarten through G...

File name:

[Download now or Read Online](#)

UNTITLED

4 Chapter Test Test Practice Write the word sentence as an inequality. 1. A number k plus 19.5 is less than or equal to 40. 1 2. A number q multiplied by is greater than $?16$. 4 Tell whether the given value is a solution of the inequality. 3 3. $n \geq 3$; $n = 7$ 4. $m < 1$; $m = ?7$ 5. $4c \geq 7$; $c = ?2$ 6. $?2.4m > ?6.8$; $m = ?3$ Solve the inequality. Graph the solution. 7. $w + 4 \geq 3$ 8. $x \geq 4 > ?6$ 2 5 9...

File name: Ch4 Test-Practice.pdf

[Download now or Read Online](#)

PERIOD

Practice Z.LLMN=.,?, LLpN g.LLMP= ? LHP4V 4 . L N PL i ssu p p l e m e n t a r y t o ? LPLn4 or LPNI4 5.LM= ? W kfs * .ALSTI (4r e ?Fori * c Lt , Jo Lu?s E u.sTL(ALGEBRA use ERS TU to find each measure or value. Rs--ra-----:zrs qre 6.TnLRST 115 LI43st,LBsr : 7.mLsrrj : 55 ; - ZJ B.1LTIJR:125 *rlig5 53 9.b: 6 J o , l v . l r t , -{ f ^ \$ r F \$ T e f BSt +,rALTI F !U-I =13 lt go Z FST Y TLIF oppost+c !, =...

File name: Chapter 6 Practice Workbook.PDF

[Download now or Read Online](#)

PRACTICE

Bisectors, Medians, and Altitudes ALGEBRA In $\triangle ABC$, AF is the angle bisector of $\angle C$, M , ff , and 6 are medians, and P is the centroid. 1. Find x if $DP : 4x \cdot 3$ and $CP : 30$. 2. Find y if $AP : y$ and $EP : 18$. 3. Find z if $FP : 5z \cdot 1$ and $BP : 42$. 4. If $m\angle ABC : x$ and $m\angle BAC : 2x - 10$, is BF an altitude? Explain. ALGEBRA In $\triangle APR$, E is an altitude and E is a median. $\angle S$, $\angle C$, $\angle P$ is $\angle A$ @fir...

File name: Chapter 5 Practice Workbook.PDF





















[Download now or Read Online](#)

DOWNLOAD PDF DOCUMENT

DOWNLOAD PDF DOCUMENT

Here below another book similar with:

ALGEBRA 1 GRADE 9 STAND...

-  [algebra 1 grade 9 standard test practice workbook holt algebra](#)
-  [practice workbook algebra 1 answers holt rinehart and winston](#)
-  [the 11 verbal reasoning practice test papers standard answers](#)
-  [holt mcdougal algebra 2 workbook](#)
-  [common core assessment readiness algebra 1 houghton mifflin harcourt holt mcdougal algebra 1](#)
-  [holt algebra 1 homework and practice](#)
-  [holt algebra 2 extra practice answers](#)
-  [test preparation workbook holt american anthem answers](#)
-  [holt algebra 2 chapter test](#)
-  [algebra 2 lesson 2 practice workbook answers](#)
-  [math connects grade 3 reteach and skills practice workbook](#)
-  [math 2012 common core reteaching and practice workbook grade 2](#)
-  [hsp math practice workbook grade 5](#)
-  [geometry standardized test practice workbook answers california](#)
-  [algebra 2 practice test chapter 1](#)
-  [year 7 algebra practice test](#)
-  [answers to algebra 1 stardized test practice](#)
-  [practice bronze lean practice test](#)
-  [7th grade taks practice test](#)
-  [science test practice grade 5 by spectrum](#)

DOWNLOAD PDF DOCUMENT