

DOWNLOAD PDF DOCUMENT



ANSWERS HOLT GEOMETRY 1...

DOWNLOAD DOCUMENT NOW

Updated: 10/19/2017

DISCLAIMER:

BE-FIRST.CO uses the following answers holt geometry 10 3 practice answers book available for free PDF download which is also related with

ANSWERS HOLT GEOMETRY 10 3 PRACTICE ANSWERS

People, who like to read eBooks and constantly use digital libraries, confess that sometimes they cannot download answers holt geometry 10 3 practice answers or other necessary files because of bugs on the site. We can explain you why this happens. It is because of various hackers' attacks that cause troubles to users of digital libraries. We offer you to download answers holt geometry 10 3 practice answers for free after registration. This action provides for free, easy and unlimited use of our library and access to answers holt geometry 10 3 practice answers. It will not take much time - just follow the link below and start the registration. You have to answer simple questions to become a constant user of our site and download answers holt geometry 10 3 practice answers if needed. When you pass the registration, you will get an access to our digital library where you will be able to find eBooks of all existing genres and fields - answers holt geometry 10 3 practice answers, belles-lettres, scientific literature and so on.

DOWNLOAD NOW

DOWNLOAD PDF DOCUMENT

DOWNLOAD PDF DOCUMENT

ANSWERS HOLT GEOMETRY 1...

[TEST 7 FORM B HOLT](#)

GeometryFree PDF eBook DownloadTest 7 Form B Holt GeometryDownload or Read Online eBook test 7 form b holt geometry in PDF Format From The Best User Guide DatabaseDownload PDF Manual about cumulative test tagged in holt geometry 9 test form b answers Description holt geometrychoose the best answer 1 9 3 square Chapter Test Form A 5 X is the ince nter of ANPQ What MUST - be true Q954 A KN KP B XN O...

File name:

[Download now or Read Online](#)

[SKILLS PRACTICE SKILLS PRACTICE FOR LESSON 4.1](#)

Name Date Interior and Exterior Angles of a Triangle Triangle Sum, Exterior Angle, and Exterior Angle Inequality Theorems Vocabulary Write the term that best completes each statement. 1. The Exterior Angle Inequality Theorem states that the measure of an exterior angle of a triangle is greater than the measure of either of the remote interior angles of the triangle. 2. The Triangle Sum Theorem st...

File name: Geometry Teacher_s Skills Practice Chapter 4.pdf

[Download now or Read Online](#)

[GEOMETRY CHAPTER 1 PRACTICE TEST](#)

GEOMETRY - CHAPTER 1Practice TestUse the figure below to answer questions 1 31 Which three points in the figure are collinearA C D FB B C DC A E FD A D E2 Name the intersection of the plane that contains points A B and D and plane PA Point DB Triangle BCDC BDD AD3 Which three points are non- coplanarA C A DB D B CC E D CD F C BDetermine whether the given statement s below is always sometimes or ne...

File name:

[Download now or Read Online](#)

[ANSWERS TO MY HRW COM](#)

Answers To My Hrw Com pdfDOWNLOAD HEREAnswers For Mathematics Worktext Course 3 Holt Mcdougalhttp www koriobook com answers answers-for-mathematics-worktext-course-3-holt-mcdougal File Type PDF Added August 31 2010 my hrw com Jenny studies 3 hours per math test throughout the year your answers in scientificnotation FileType PDFwww hrw com CA HOLT CALIFORNIA 800 479 - Modesto City Schoolshttp www m...

File name:





















[Download now or Read Online](#)

DOWNLOAD PDF DOCUMENT

DOWNLOAD PDF DOCUMENT

Here below another book similar with:

ANSWERS HOLT GEOMETRY 1...

-  [holt geometry geometry answer key](#)
-  [answers holt geometry 10 3 practice answers](#)
-  [holt geometry practice b answers triangle congruence](#)
-  [holt geometry skills practice](#)
-  [answer key for holt geometry dilation practice](#)
-  [practice masters for geometry houghton mifflin practice](#)
-  [cumulative test holt geometry answers](#)
-  [holt geometry test answers](#)
-  [holt geometry lesson 7](#)
-  [holt geometry california tests](#)
-  [holt geometry review for mastery](#)
-  [holt geometry test answer key](#)
-  [geometry prentice hall extra practice answers](#)
-  [extra practice geometry answers mcgraw lesson](#)
-  [geometry standardized test practice workbook answers california](#)
-  [practice workbook algebra 1 answers holt rinehart and winston](#)
-  [answers to holt mcdougal mathematics practice](#)
-  [holt algebra 2 extra practice answers](#)
-  [springboard geometry lesson practice key](#)
-  [prentice hall practice geometry workbook answer key](#)

DOWNLOAD PDF DOCUMENT